

1 N grade 1

1	2	3	4	5	6	7	8	ИТОГ

ANSWER SHEET

Last name: _____ First name: _____

Grade _____ School: _____

ANSWERS:

Problem 1. P – O = B – E = D – I = T + E = L + I


Answer. – = – = – = + = +

Problem 2. Answer.

Red parrot has _____ nuts, green parrot has _____ nuts,
blue parrot has _____ nuts.

Problem 3. Answer:

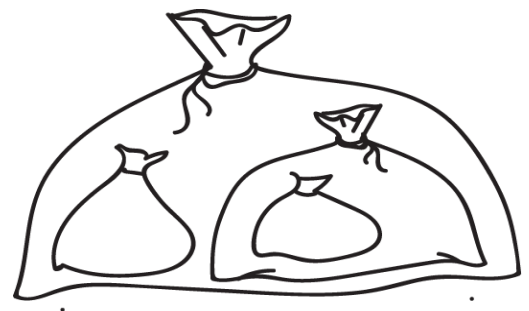
Please show on the picture where Piglet should shoot to pop all the balloons.



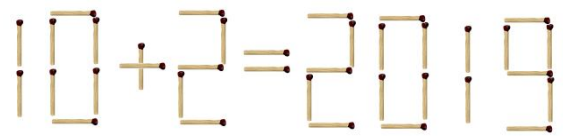
Problem 4. Answer:

Alena has _____ ribbons.

Problem 5. Answer:



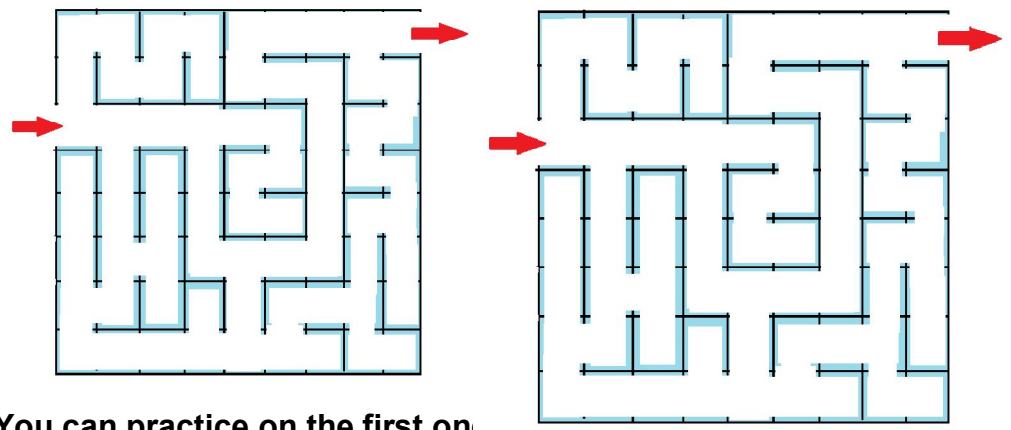
Problem 6. Answer.



Show which matches you should move and where you are moving them to.

Write the correct problem: _____

Problem 7. Answer. Show the path through the maze



You can practice on the first on second.

Problem 8. Answer. The remaining soldier's name is _____