

2

N

2nd grade

1	2	3	4	5	6	7	8	Total

Your name _____

Grade _____ School _____

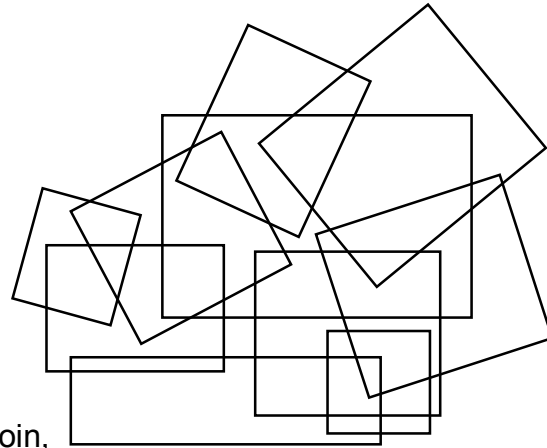
Answer sheet

Problem 1. $O \times L = I + M = P + I + A = D \times A.$

Answer. $\square \times \square = \square + \square = \square + \square + \square = \square \times \square$

Problem 2. Answer.

Show where Mike's darts landed.




Problem 3. Answer.

The heaviest is the _____ coin,
then the _____ coin, and the lightest is the _____ coin.



Explain your reasoning _____

Problem 4. Answer. Label Peter's house with P, and Mary's house with M.

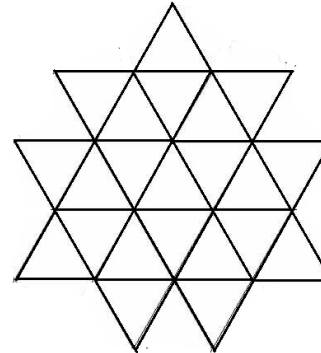
If you found another answer, show it on the second picture.



Problem 5. Answer.



Problem 6. Answer.



Problem 7. Answer. The number is _____.

Explain your reasoning _____

Problem 8. Answer. The shape of the card is _____